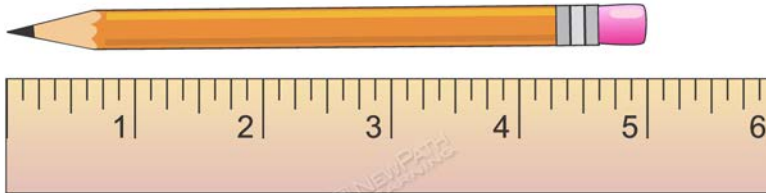


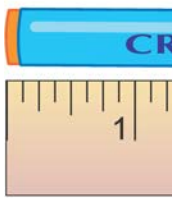
MEASUREMENT

Measuring to the nearest inch:



This pencil is 5 inches in length.

Measuring to the nearest $\frac{1}{4}$ inch:

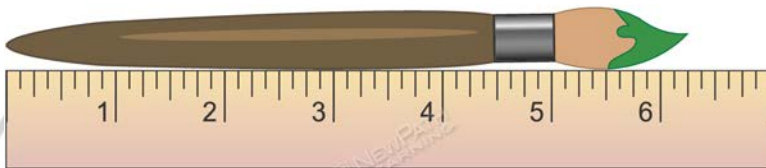


Please login or register to download the printable version of this study guide.

www.newpathlearning.com

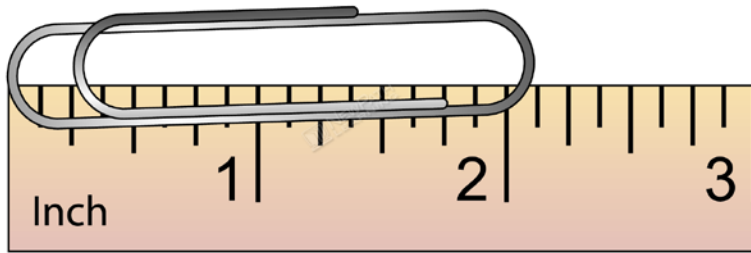
This crayon is $3 \frac{1}{2}$ inches in length.

Measuring to the nearest $\frac{1}{4}$ inch:



This paint brush is $6 \frac{1}{4}$ inches in length.

Measuring to the nearest $\frac{1}{8}$ inch:



This paper clip is $2 \frac{1}{8}$ inches in length.



PREVIEW

Please login or register to download the
printable version of this study guide.

www.newpathlearning.com