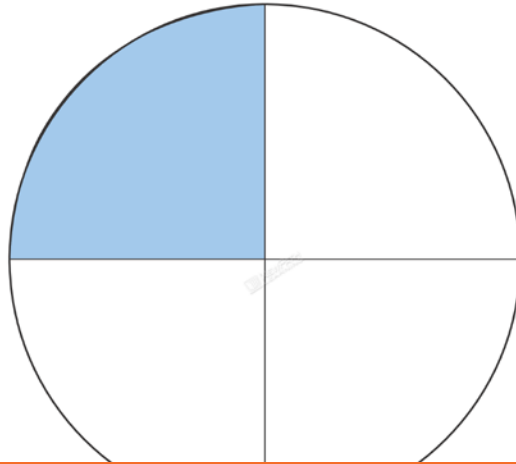


## FRACTIONS GREATER THAN OR LESS THAN $\frac{1}{2}$

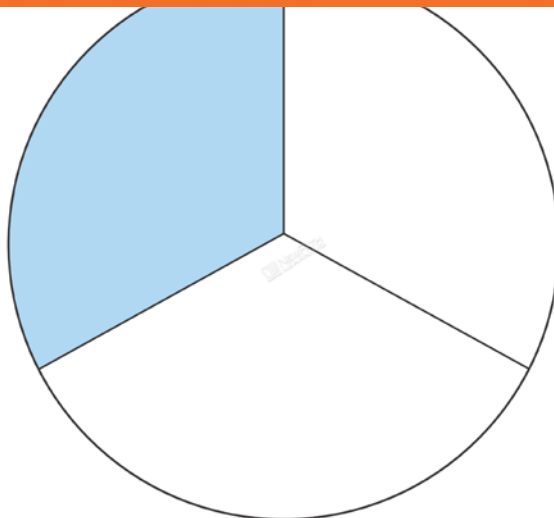
Fractions from **LEAST** to **GREATEST**:



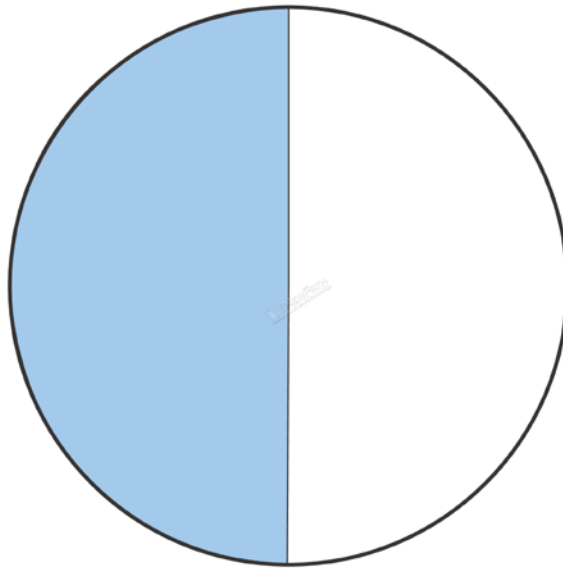
**PREVIEW**

Please login or register to download the  
printable version of this study guide.

[www.newpathlearning.com](http://www.newpathlearning.com)



$\frac{1}{3}$



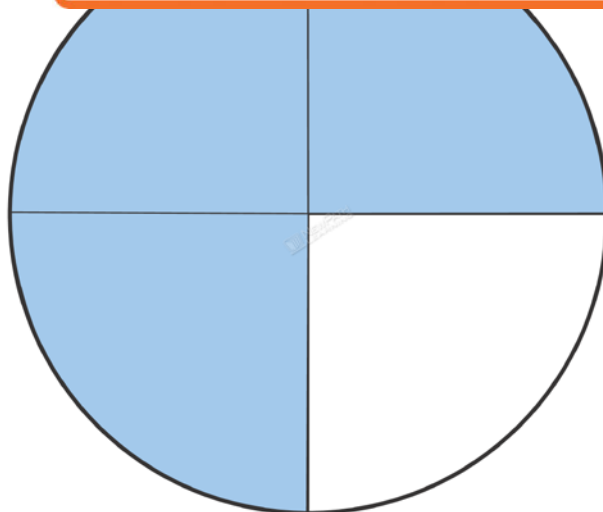
1



**PREVIEW**

Please login or register to download the  
printable version of this study guide.

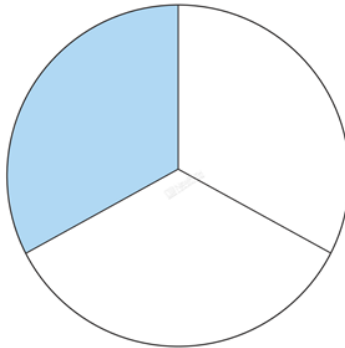
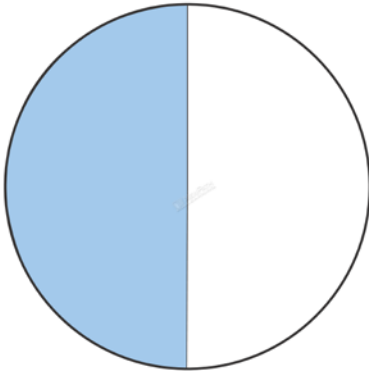
[www.newpathlearning.com](http://www.newpathlearning.com)



$\frac{3}{4}$

**Which fraction is greater?**

$\frac{1}{2}$  or  $\frac{1}{3}$



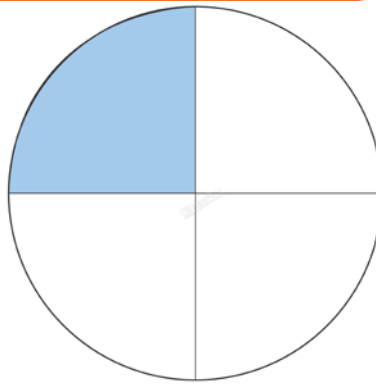
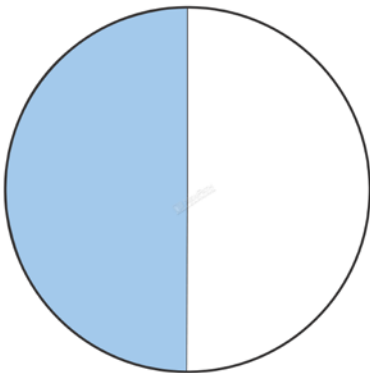
**Which fr**



**PREVIEW**

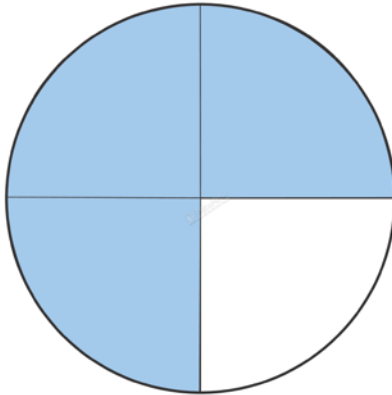
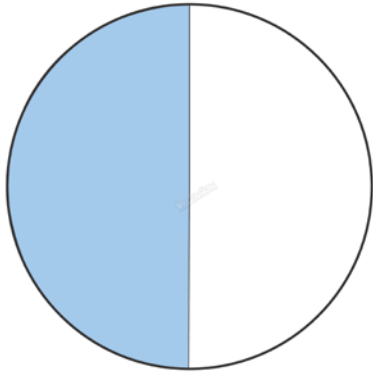
Please login or register to download the  
printable version of this study guide.

[www.newpathlearning.com](http://www.newpathlearning.com)



**Which fraction is greater?**

$\frac{1}{2}$  or  $\frac{3}{4}$



**PREVIEW**

Please login or register to download the  
printable version of this study guide.

[www.newpathlearning.com](http://www.newpathlearning.com)